




# CVC Words FLUENCY PASSAGES



Name \_\_\_\_\_



van  
••

mat  
••

cat  
••

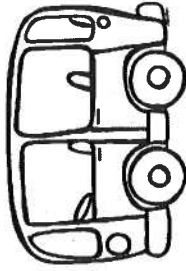
see

can  
••

nap  
••

fat  
••

the



I see a van.

I see a mat in the van.

I see a fat cat on the mat.

The fat cat can nap on the  
mat in the van.



pig  
●●

sun  
●●


mud  
●●

hot  
●●

see

the

is



I see the sun.

The sun is hot.

I see a pig.

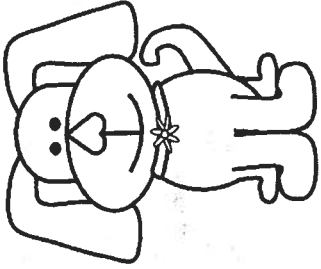
The pig is in the mud.



Tom ●●	dog ●●	run ●●	big ●●
can ●●	dig ●●	sit ●●	bed ●●

is

my



Tom is my dog.

Tom is a big dog.

Tom can run. Tom can dig.

Tom can sit on my bed.



Pam ●● sad ●● wet ●● got ●●

Ben ●● not ●● get ●● did ●●

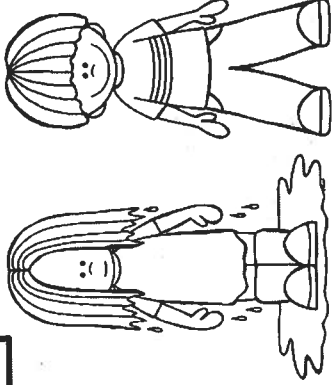
is

Pam is sad.

Pam got wet.

Ben is not sad.

Ben did not get wet.





hen

bug

red


see

the

is

log

mug

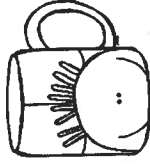


I see a red hen.

The red hen is on a log.

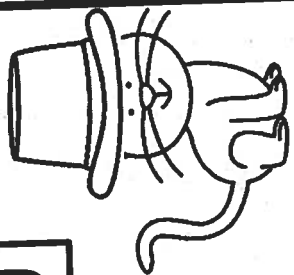
I see a bug.

The bug is in a mug.





Sam ●●	cat ●●	big ●●	can ●●	has
hat ●●	hop ●●	bed ●●	hug ●●	like
				is my



Sam is my cat.  
 My cat has a big hat.  
 My cat can hop on my bed.  
 I like to hug my cat.



Jen  
●●

vet  
●●

can  
●●

pig  
●●

pet  
●●

sad  
●●

let  
●●

see

the

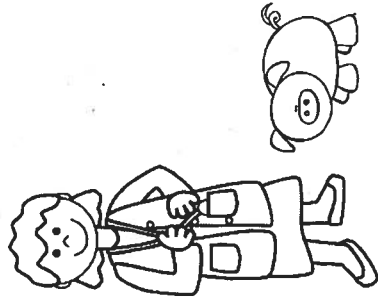
is

Jen is a vet.

Jen can see a pig.

The pig is sad.

Let Jen pet the pig!





Name: \_\_\_\_\_

Write the answer for each problem. Then, color according to the key at the bottom.

Math problems scattered throughout the butterfly illustration:

- Top left:  $\begin{array}{r} 3 \\ +3 \\ \hline \end{array}$
- Top middle:  $\begin{array}{r} 9 \\ +7 \\ \hline \end{array}$
- Top right:  $\begin{array}{r} 8 \\ +9 \\ \hline \end{array}$
- Far top right:  $\begin{array}{r} 4 \\ +2 \\ \hline \end{array}$
- Upper right wing:  $8+1=$
- Upper middle wing:  $4+1=$
- Middle left wing:  $\begin{array}{r} 5 \\ +5 \\ \hline \end{array}$
- Middle left wing:  $6+6=$
- Middle wing:  $2+2=$
- Middle wing:  $\begin{array}{r} 1 \\ +3 \\ \hline \end{array}$
- Middle right wing:  $9+3=$
- Middle right wing:  $4+6=$
- Lower middle wing:  $\begin{array}{r} 7 \\ +3 \\ \hline \end{array}$
- Lower middle wing:  $1+1=$
- Lower middle wing:  $9+9=$
- Lower right wing:  $\begin{array}{r} 1 \\ +5 \\ \hline \end{array}$
- Lower left wing:  $\begin{array}{r} 3 \\ +9 \\ \hline \end{array}$
- Lower left wing:  $9+1=$
- Lower middle wing:  $2+8=$
- Lower right wing:  $\begin{array}{r} 8 \\ +4 \\ \hline \end{array}$
- Lower right wing:  $\begin{array}{r} 4 \\ +5 \\ \hline \end{array}$
- Bottom left wing:  $\begin{array}{r} 6 \\ +3 \\ \hline \end{array}$
- Bottom left wing:  $3+2=$
- Bottom right wing:  $\begin{array}{r} 7 \\ +5 \\ \hline \end{array}$
- Bottom wing:  $2+1=$

 Red 2, 18




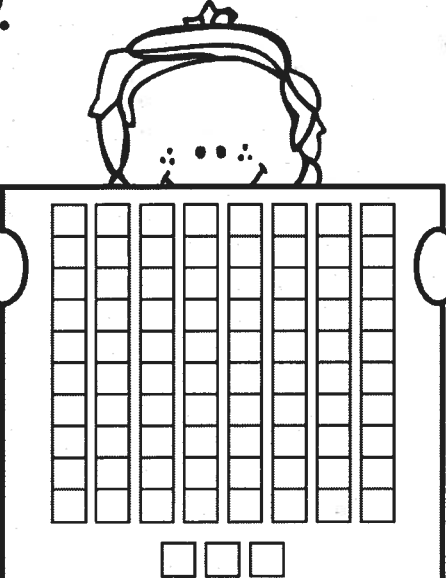

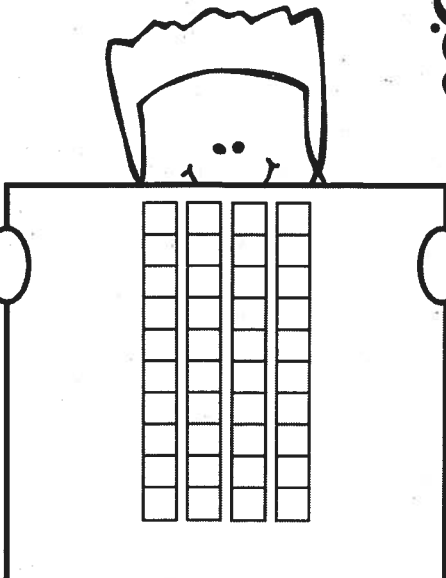
 Yellow 17

 Green 10

 Blue 6, 9, 12, 16


 Gray 4

 White 3, 5

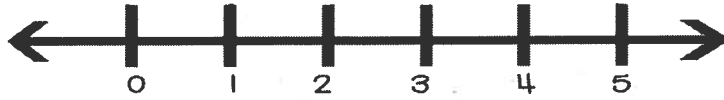
		
<p>__ tens __ ones = _____</p>	<p>__ tens __ ones = _____</p>	<p>__ tens __ ones = _____</p>
		
<p>__ tens __ ones = _____</p>	<p>__ tens __ ones = _____</p>	<p>__ tens __ ones = _____</p>

Counting backward  
Subtracting 1 and 2  
Minuends to 5


# Subtract



Use pictures, touch points,  
or the number line to help.



Trace the numbers.



$$5 - 2 = \square$$



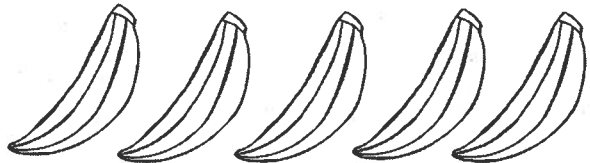
$$3 - 1 = \square$$




$$4 - 2 = \square$$




$$5 - 1 = \square$$



$$2 - 2 = \square$$




$$1 - 1 = \square$$




Name: \_\_\_\_\_


I can count on starting at any number.




→  →  →  →  →




→  →  →  →  →




→  →  →  →  →



→  →  →  →  →



→  →  →  →  →



→  →  →  →  →

Name \_\_\_\_\_

# Comparing Numbers

Use the greater than, less than, and equal to signs to compare.

47

28

95

33

72

72

14

42

85

80

34

45



>

>

>

=

<

<

# The Painter

Tim is happy. He is painting.  
He will paint a picture for his  
friend Anne. It is her birthday.  
She will love it!




1. What is Tim doing?

Singing



Painting



Sleeping



2. Who is Tim's friend?

Anne



Jenny




Anthony






# Carl and Dennis


Carl is a cat. He like to sleep all day. Dennis is a Dog. Dennis likes to play with Carl out in the backyard.



1. What is Carl?



2. What do Carl and Dennis like to do?






# School

Jenny is going to school today! First she will wake up, then she will get dressed and eat breakfast. Then she will get on the bus for school!



1. Who is going to school?



2. What does she do first?

